


Year 6 SATs Meeting

The Tests

English reading test
reading booklet and comprehension questions

English grammar, punctuation and spelling test, Paper 1,
short answer questions. English grammar, punctuation
and spelling test
Paper 2, spelling.


Mathematics,
Paper 1, arithmetic test.
Paper 2, reasoning.
Paper 3, reasoning.

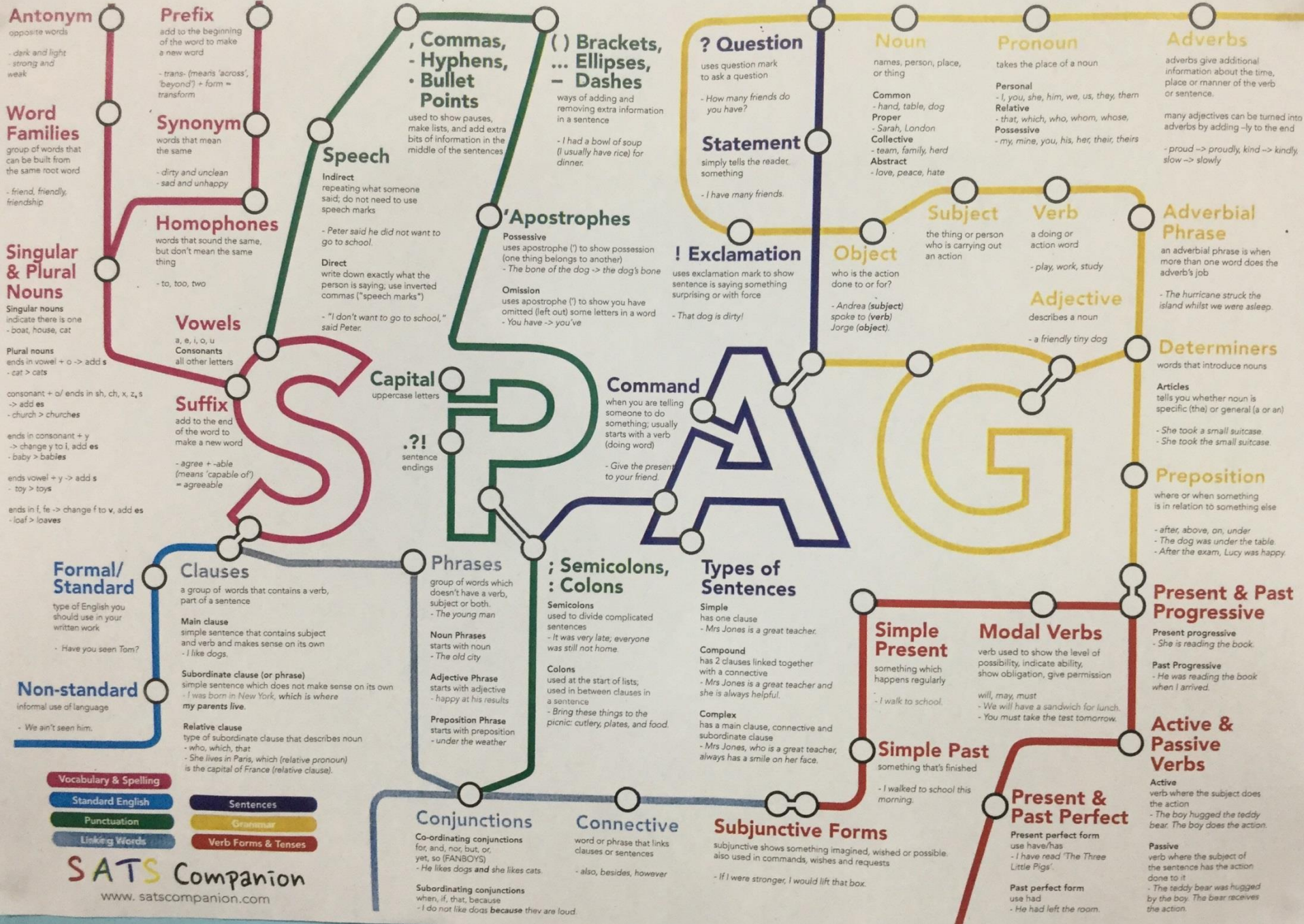


Monday 13th – Thursday 16th May

Date	Activity
Monday 13 May 2024	English grammar, punctuation and spelling papers 1 and 2
Tuesday 14 May 2024	English reading
Wednesday 15 May 2024	Mathematics papers 1 and 2
Thursday 16 May 2024	Mathematics paper 3

KS2 Grammar, Punctuation and Spelling

- ▶ The grammar, punctuation and spelling test will consist of two parts:
 - ▶ a grammar and punctuation paper requiring short answers, lasting 45 minutes (50 marks),
 - ▶ and a spelling test of 20 words, lasting around 15 minutes (20 marks).
 - ▶ 70 marks available combined
- 



3

Draw a line to match each **prefix** to the correct word so that it makes a new word.

Prefix

re

de

mis

im

il

Word

mature

understood

legible

frost

do

1 mark

4

Which sentence has been punctuated correctly?

Tick **one**.

Immediately after, dinner we did the washing up.

☐

Immediately after dinner we did, the washing up.

☐

Immediately after dinner, we did the washing up.

☐

Immediately, after dinner we did the washing up.

☐

6

Circle one verb in each underlined pair to complete the sentences using **Standard English**.

We was / were planning to hold a cake sale at school.

I was / were chosen to design the posters.

1 mark

7

Write the **contracted form** of the underlined words in the box.

That decision does not seem fair.



1 mark

10

What does the word Others refer to in the passage below?

Some plants, such as sunflowers, die in winter. Others, such as daffodils, survive as bulbs underground.

Tick **one**.

plants

☐

sunflowers

☐

daffodils

☐

bulbs

☐

1 mark

13

Tick one box to show which part of the sentence is a **relative clause**.

The table which is made of oak is now black with age.

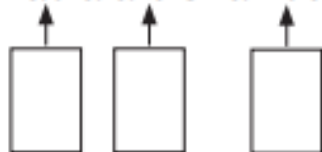


1 mark

25

Label the boxes with **V (verb)**, **S (subject)** and **O (object)** to show the parts of the sentence.

Nadia ate strawberries.



1 mark

23

Draw a line to match each word to its correct **antonym**.

Word

meandering

sympathetic

evade

plausible

Antonym

confront

unfeeling

unbelievable

straight

1 mark

17

Tick one box in each row to show if the underlined clause is a **main clause** or a **subordinate clause**.

Sentence	Main clause	Subordinate clause
Billie, <u>who was nine years old</u> , loved to play tennis.		
Billie's mum bought her a tennis racket <u>so that she could play more often</u> .		
<u>Billie could not play tennis with her friend Lana</u> because Lana did not have a racket.		

1 mark

22

What does the root struct mean in the word family below?

destruction

structure

reconstruct

Tick **one**.

break

☐

build

☐

carry

☐

touch

☐

1 mark

OXFORD

Oxford Primary Grammar, Punctuation and Spelling Dictionary

Ideal for supporting the
primary curriculum





Key Stage 2 Reading (1 hour)

Every second counts!

The reading test will provisionally be a single paper with questions usually based on a piece of fiction, a piece of poetry and a piece of non-fiction (in total, the booklet will be between approximately 1,500 and 2,300 words in length). (50 marks)

There will be a selection of question types, including:
BACK UP YOUR POINT USING EVIDENCE FROM THE TEXT

- **Ranking/ordering**
 - **Fact retrieval**
 - **Find and copy**
 - **Open-ended response (inference)**
 - **Word meaning**
- 



ENGLISH

There also lived with Jack an elderly spinster called Em Sharp who was the true guardian of the place and of the memories of the family. The farmhouse never got any cleaner under her care, but it never got any dirtier either. In fact, she was determined that nothing should change, and nothing did.

There were times, as I grew older, when I went to stay with Jack on my own. I followed him on his work around the farm, or explored the empty rooms of the farmhouse. One day – I was twelve years old – it was raining and Jack had taken the car on business. Left to my own devices, I visited the dogs and young chicks, watched Em Sharp for a while as she prepared lunch, then made my way upstairs into the largest and most remote of the empty rooms, where one of the big bookcases had attracted my curiosity.

I pulled out some of the books, glancing idly at the contents, and then, as I went to return one of them to its place, my eye was caught by something in the dark recesses of the shelf. I reached in and drew it out. It was a large red dice, but like no other dice I had ever seen.

I took it to the window to inspect it. Each face had a symbol: a tower, a sword, a broken circle, something that looked like a pillar of stone. It was obvious that the dice had been fashioned by hand, for I could even make out the tiny blade marks, and none of the faces was precisely even.

As I sat and puzzled over the symbols, it dawned on me that the dice ought to belong to a game of some kind. So I returned to the bookcase to make a thorough search.

I looked behind every book and even used my hand to sweep out the shallow gap under the bottom shelf. There must have been ten years' worth of assorted debris under there. Finally I began to edge the entire bookcase away from the wall. It was extremely heavy and it took me some time to get it out far enough to look behind. There was a thick network of cobwebs and dust. I thought for a moment and plunged my hand in the gap.

There was something there, a flat box. It was covered with grime and falling apart. Opening it, I found a board, counters, cards, and a number of little figures. I wiped

38

Look at page 10.

What impressions do you get of Em Sharp at this point in the extract?

Give **two** impressions, using evidence from the text to support your answer.

Impression	Evidence

39

In the last paragraph, Edward does not want to give the game to Em Sharp.

Give **two** reasons why he does **not** want to part with it.

1. _____

2. _____

2 marks

40

Edward found a game. How can you tell that there was something strange about the game?

Explain **two** ways, using evidence from the text to support your answer.

1. _____

2. _____

3 marks

The Giant Panda Bear

Panda bears are very popular animals, partly because of their unusual appearance and partly because there is something mysterious and fascinating about them. However, their numbers are falling. It is thought that only around 1600 giant pandas still survive in the wild.

Appearance

Giant pandas have the same type of body shape as other bears. They have thick black and white fur, which some scientists think may be to disguise them in the snowy and rocky surroundings where they live. An adult can grow up to 1.5 metres and weigh up to 150 kilograms. They might look cute but they have razor-like claws. They also have powerful jaws for crushing and grinding bamboo!

Habitat

Giant pandas in the wild live on mountainous slopes in western China. Their habitat is densely populated with fir trees and bamboo. It is the forests in these mountains that attract the panda as bamboo is their favourite food.

Diet

In the wild, their main diet is bamboo. To survive, they need to eat for most of the day. In fact, they eat 15 to 30 kilograms of food every day and spend 10 to 16 hours feeding. In zoos, they have a specially prepared diet of bamboo, eggs, fish and honey.

Cubs

Newborn cubs weigh around 150 grams (about the weight of an apple) and are all white at birth. The black spots develop after about a month. They begin eating bamboo at six months and weigh 31 to 36 kilograms at the end of the first year. Cubs stay with their mother for two to three years, reach maturity at five to seven years and live in the wild for about 25 years.

Other interesting facts

6

Look at page 4.

According to the text, give **one** way that giant pandas are...

(a) similar to other bears.

1 mark

(b) different from other bears.

1 mark

7

Look at the section headed: *Other interesting facts*.

Complete the sentence below.

Recent studies show that...

Tick one.

giant pandas always spend most of their lives alone.

☐

most giant pandas live in captivity.

☐

giant pandas only live in the wild in China.

☐

some giant pandas live in the same area.

☐

1 mark



Grannie

I stayed with her when I was six then went
To live elsewhere when I was eight years old.
For ages I remembered her faint scent
Of lavender, the way she'd never scold
No matter what I'd done, and most of all
The way her smile seemed, somehow, to enfold
My whole world like a warm, protective shawl.

I knew that I was safe when she was near,
She was so tall, so wide, so large, she would
Stand mountainous between me and my fear,
Yet oh, so gentle, and she understood
Every hope and dream I ever had.
She praised me lavishly when I was good,
But never punished me when I was bad.

Years later war broke out and I became
A soldier and was wounded while in France.
Back home in hospital, still very lame,
I realised suddenly that circumstance
Had brought me close to that small town where she
Was living still. And so I seized the chance
To write and ask if she could visit me.

She came. And I still vividly recall
The shock that I received when she appeared
That dark cold day. Huge grannie was so small!
A tiny, frail, old lady. It was weird.
She hobbled through the ward to where I lay
And drew quite close and, hesitating, peered.
And then she smiled: and love lit up the day.

Questions 16–29 are about *Grannie* (page 6)

- 16** Find and copy **one** word from the first verse that shows that the poet's grannie made him feel safe when he was a boy.

1 mark

- 17** How did the poet's grannie react when he behaved badly?

1 mark

- 18** The poet describes his grannie as standing *mountainous between me and my fear*. This makes her sound big and powerful.

What other impressions do you get of his grannie in the same verse?


Give **two** impressions.

1. _____

2. _____

2 marks

Year 6 Maths



Children sit three papers in maths:

Paper 1: **arithmetic**, 30 minutes (40 marks)

Paper 1 will consist of fixed response questions, where children have to give the correct answer to calculations, including long multiplication and division.

Papers 2 and 3: **reasoning**, 40 minutes per paper (35 marks each for paper 2 and 3)

110 marks combined


Papers 2 and 3 will involve a number of question types, including:

Multiple choice

True or false

Constrained questions, e.g. giving the answer to a calculation, drawing a shape or completing a table or chart

Less constrained questions, where children will have to explain their approach for solving a problem



23

	X

		5	4
		2	3

**Show
your
method**

[illegible]

2 marks




29

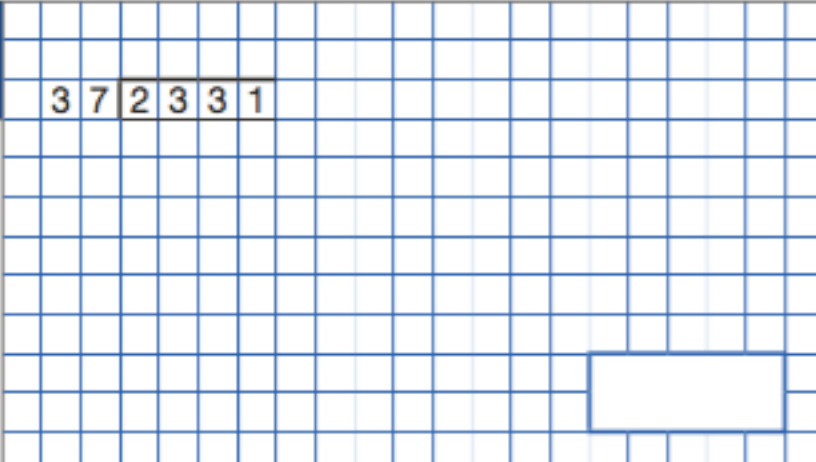


	✕

		6	7	8
			5	4

Show
your
method

[illegible]

25										
	1	3	3	0	1	6				
Show your method										
										
										
2 marks										

34										
	3	7	2	3	3	1				
Show your method										
										
										
2 marks										

19

$$\frac{1}{9} + \frac{4}{9} =$$

☐

1 mark

35

$$\frac{3}{4} + \frac{7}{8} =$$

☐

1 mark

30

$$17 \times 1\frac{1}{2} =$$

--	--

9

1 mark

26

$$\frac{1}{4} \times \frac{1}{8} =$$

--	--

1 mark

36

$$\frac{3}{4} \div 2 =$$

$$\frac{2}{5} \div 2 =$$

32

$$\frac{2}{5} \div 2 =$$

1 mark

National curriculum tests

Key stage 2

Mathematics

Paper 2: reasoning

First name						
Middle name						
Last name						
Date of birth	Day		Month		Year	
School name						

National curriculum tests

Key stage 2

Mathematics

Paper 3: reasoning

First name						
Middle name						
Last name						
Date of birth	Day		Month		Year	
School name						

11

Here is a number written in Roman numerals.

CXV

Write the number in figures.

1 mark

7

Write the number 53,148 in **words**.

1 mark

11

Write the four missing digits to make this **addition** correct.

$$\begin{array}{r} \boxed{} \boxed{6} \boxed{} \boxed{8} \\ + \boxed{3} \boxed{} \boxed{9} \boxed{} \\ \hline \boxed{9} \boxed{0} \boxed{1} \boxed{9} \end{array}$$

2 marks

10

Write the two missing digits to make this **long multiplication** correct.

$$\begin{array}{r} \times \quad \quad \quad 4 \quad \square \\ \square \quad 6 \\ \hline 2 \quad 4 \quad 6 \\ 8 \quad 2 \quad 0 \\ \hline 1 \quad 0 \quad 6 \quad 6 \end{array}$$

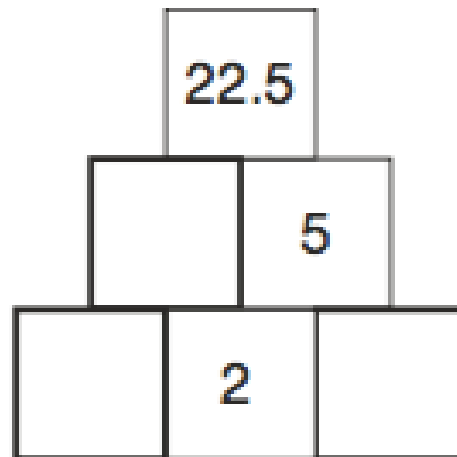
2 marks

14

Here is a number pyramid.

The number in a box is the **product** of the two numbers below it.

Write the missing numbers.



2 marks

12

Two decimal numbers add together to equal 1

One of the numbers is 0.007

What is the other number?

1 mark

19

The area of a rugby pitch is 6,108 square metres.

A football pitch measures 112 metres long and 82 metres wide.

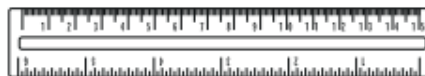
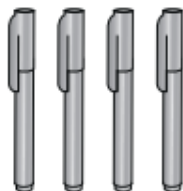
How much larger is the area of the football pitch than the area of the rugby pitch?

Show
your
method

square metres

10

Adam buys 4 pens and a ruler and pays £4.75 altogether.



Jack buys 2 pens and pays £1.98 altogether.



How much does a **ruler** cost?

Show
your
method

A large rectangular grid for showing the method. It is 20 units wide and 15 units high. A smaller rectangular box is drawn in the bottom right corner of the grid, spanning 5 units wide and 3 units high.

2 marks

15

Amina went to a concert one evening.



It took her an hour and twenty minutes to get there from home.

She arrived at ten past seven.

At what time did she leave home?

1 mark

The concert started at 7:20 pm.

It finished at 9:05 pm.

How long did the concert last?

hours	minutes
-------	---------

1 mark

16

A box of 24 chocolate eggs has a mass of **870 grams**.

The empty box has a mass of **30 grams**.



What is the mass of **one** chocolate egg?

Show
your
method

A blank coordinate grid with a horizontal axis labeled 'g'. The grid is 20 units wide and 10 units high. The horizontal axis is at the bottom, and the vertical axis is on the left. The label 'g' is located at the bottom right of the grid, near the 19th unit mark on the horizontal axis.

2 marks

KS2 science

Ministers have decided not to undertake any further science sampling tests at KS2 from September 2022 onwards.

Schools will still submit teacher assessment data at both KS1 and KS2.

Scores

English reading

Raw score	Scaled score
0-2	No scaled score
3	82
4	83
5	84
6	86
7	87
8	88
9	89
10	90
11	91
12	92
13	92
14	93
15	94
16	95
17	95
18	96
19	97
20	97




Raw score	Scaled score
21	98
22	99
23	99
24	100
25	101
26	101
27	102
28	103
29	103
30	104
31	105
32	105
33	106
34	107
35	108
36	108
37	109
38	110
39	111
40	112



Raw score	Scaled score
41	113
42	114
43	115
44	116
45	118
46	119
47	120
48	120
49	120
50	120

Scores

Raw score	Scaled score
0-2	No scaled score
3	80
4	80
5	80
6	81
7	82
8	83
9	83
10	84
11	85
12	85
13	86
14	86
15	87
16	88
17	88
18	88
19	89
20	89
21	90
22	90
23	91
24	91
25	91
26	92
27	92
28	92
29	93
30	93
31	93
32	93
33	94
34	94
35	94
36	95
37	95
38	95
39	95
40	96



Raw score	Scaled score
41	96
42	96
43	97
44	97
45	97
46	97
47	98
48	98
49	98
50	98
51	98
52	99
53	99
54	99
55	99
56	100
57	100
58	100
59	100
60	101
61	101
62	101
63	101
64	101
65	102
66	102
67	102
68	102
69	103
70	103
71	103
72	103
73	104
74	104
75	104
76	104
77	105
78	105
79	105
80	105

Raw score	Scaled score
81	106
82	106
83	106
84	106
85	107
86	107
87	107
88	108
89	108
90	108
91	109
92	109
93	109
94	110
95	110
96	110
97	111
98	111
99	112
100	112
101	113
102	113
103	114
104	115
105	116
106	117
107	118
108	119
109	120
110	120



Scores

English grammar, punctuation and spelling

Raw score	Scaled score
0-2	No scaled score
3	80
4	81
5	82
6	83
7	84
8	85
9	85
10	86
11	87
12	88
13	88
14	89
15	90
16	90
17	91
18	91
19	92
20	92
21	93
22	93
23	94
24	94
25	95



Raw score	Scaled score
26	95
27	96
28	96
29	97
30	97
31	97
32	98
33	98
34	99
35	99
36	100
37	100
38	101
39	101
40	101
41	102
42	102
43	103
44	103
45	104
46	104
47	105
48	105
49	106
50	107

Raw score	Scaled score
51	107
52	108
53	108
54	109
55	110
56	110
57	111
58	112
59	112
60	113
61	114
62	115
63	116
64	117
65	119
66	120
67	120
68	120
69	120
70	120



Supporting your child before and during SATs week

▶ What we do


1. Provide positivity/bolster confidence and resilience
2. Create a happy and hard working learning environment
3. Opportunities to apply taught skills

Aim to make it a 'break from the norm' kind of week

▶ What you can do

1. Provide positivity/bolster confidence and resilience
2. Support child with 10 minute home learning books and homework (Education City Learn It Screens help)
3. Set out a structured programme to help child(ren) to revise and practise (little and often seems to be successful)
4. Ensure reading diaries are signed and filled in at least 4 times a week – more is better for reading stamina!

▶ What your child can do

1. Take an active role/engage in their learning in and out of school
 2. Ask for help, guidance and support
 3. Stay positive and to be resilient when faced with difficult challenges
- 

Year 6 Revision Guides

Here is a recommended list of revision books to help you to prepare for SATs.

The 10 minutes test books are a perfect way to practise exam type questions in short bursts.

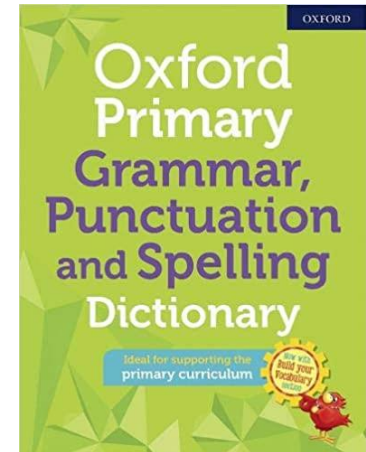
KS2 English SAT Buster 10–Minute Tests : Grammar, Punctuation & Spelling Paperback – **BOOK 2**

KS2 Maths SAT Buster: 10–Minute Tests Paperback – **BOOK 2**

KS2 English SAT Buster 10–Minute Tests: Reading Paperback – **BOOK 2**

Please don't buy Book 1, as they will be used in class.

Please also don't forget to purchase the Oxford Primary Grammar, Punctuation and Spelling Dictionary (Oxford Dictionary) book. This is a vital resource in readiness for the Grammar and Punctuation test. It will be also very useful for high school.



Complete KS2 Maths and English 10-Minute Test SAT Buster Book 2 Bundle (for the 2024 tests)

Money-saving bundle

Bundle

Product code: EMXB222
ISBN: N/A

★★★★★ (14)

[Write a review](#)



[Take a Look](#)

In stock

£14.00

1 [Add to Basket](#)

[Add to Book List](#)

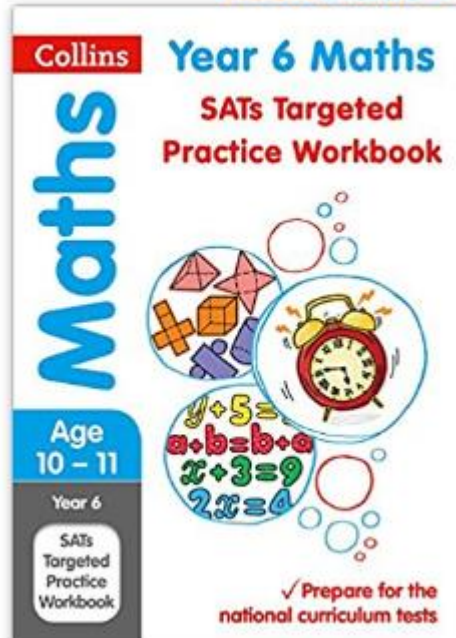
Free delivery on all UK orders over £30

These are also fantastic guides

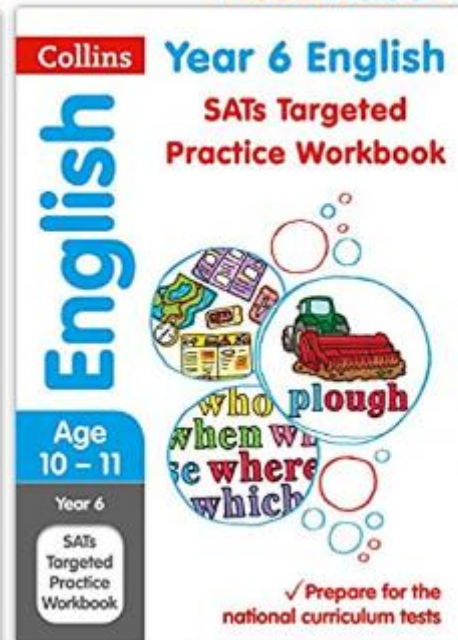
Look inside ↓



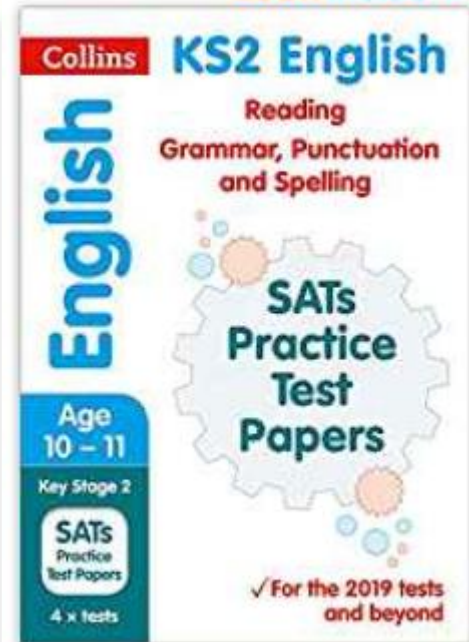
Look inside ↓



Look inside ↓



Look inside ↓





cgppius.co.uk

Contact Us

My Online Products

Browsing as UK School/Teacher

Register

Sign In

Search site



Primary ▾

KS3, GCSE & A-Level ▾

11+ & 13+ ▾

All Products ▾

What's New

Guestbook

Home > Primary > Primary SATS Books

Save up to 30% with our [brilliant bundles](#) for Primary and Secondary!

Primary SATS Books

Key Stage

- ☐ Key Stage One (0)
- ☐ Key Stage Two (116)
- ☐ All Primary (2)

School Year

- ☒ Year 6 (116)
- ☐ Year 5 (18)
- ☐ Year 4 (18)
- ☐ Year 3 (18)

View type:



Products per page

36 ▾

Sort by

Most popular ▾

1-36 of 116 results



hexagon6

Files to Download

Recommended Reads Y6

Year 6 Maths Revision

Year 6 Online Pledge

Revision List - Year 6 SATs

Year 6 Maths Revision Resource.pdf

Year 6 Maths Revision Resource Details

Meet the Teacher Presentation

Year 6 Curriculum Map

Parent-handout-ks2-sats-2024





DashBoard

2020

FOR NEW SATS REVISION VIDEOS!

Access Via Your School Website or Our Great New APP - "GENIUS SATS KS2 MATHS" on the App Stores Now!

ARITHMETIC BOOSTERS CODES 1-10	<p>2019 national curriculum tests</p> <p>Key stage 2</p> <p>Mathematics</p> <p>Papers 1, 2 and 3 - Arithmetic and Reasoning</p> <ul style="list-style-type: none">• This book is aimed at:• Year 6 students• Class of work begun at this level <p>First Name: _____</p> <p>Initial Name: _____</p> <p>Last Name: _____</p> <p>Enrolment Name: _____</p> <p>Enter Code</p>	PAST PAPERS	REASONING BOOSTERS CODES 11 - 48
<p>30 ARITHMETIC PAPERS</p> 	 <p>365 Mini-Maths Videos</p>	YEAR 5 DAILY VIDEO	 ARITHMETIC NINJA!
 ARITHMETIC REVISION	 MIXED REVISION	WHITE ROSE	

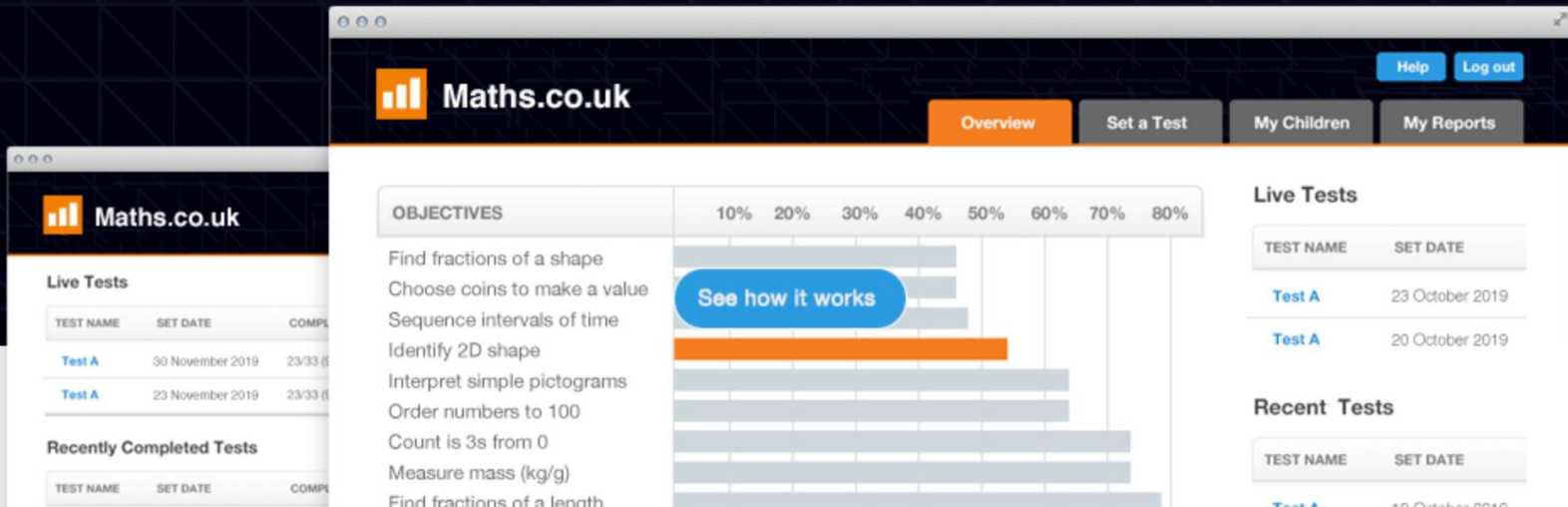
KS1 & KS2 Maths tests for instant gap analysis

See Plans & Pricing

log in here
↓

Login

[Forgot password](#)



The screenshot displays the Maths.co.uk website interface. The top navigation bar includes the Maths.co.uk logo, a navigation menu with 'Overview' (highlighted), 'Set a Test', 'My Children', and 'My Reports', and 'Help' and 'Log out' buttons. The main content area is divided into three sections:

- OBJECTIVES**: A list of 10 math objectives with corresponding progress bars. The first objective, 'Find fractions of a shape', has a blue bar reaching approximately 45%. A blue button labeled 'See how it works' is overlaid on the first bar.
- Live Tests**: A table showing two tests.
- Recent Tests**: A table showing one test.

TEST NAME	SET DATE	COMPLETED
Test A	30 November 2019	23/33 (6)
Test A	23 November 2019	23/33 (6)

TEST NAME	SET DATE	COMPLETED
Test A	30 November 2019	23/33 (6)

123



ABC



KS2 SATs: a parents' guide

If your child will be sitting Y6 SATs in 2023, read on for the most up-to-date information for parents.



In the summer term of 2016, children in Y2 and Y6 were the first to take new SATs tests. The current SATs for English and maths reflect

externally, and the results are used to measure the school's performance (for example, through reporting to Ofsted and published league tables). Your child's marks will be used in conjunction with teacher assessment to give a broader picture of their attainment.

KS2 reading

The reading test is a single paper with questions based on three passages of text. Your

How are SATs marked?

- Instead of national curriculum levels, children are given scaled scores and details of whether they've reached the expected standard ('NS' means that the expected standard was not achieved; 'AS' means it was).