


Fractions of Amounts


Can you find $\frac{3}{4}$ of these amounts?
The first one has been done for you.

Top Tip:


To find $\frac{3}{4}$, cross out $\frac{1}{4}$ and count the remaining amount.



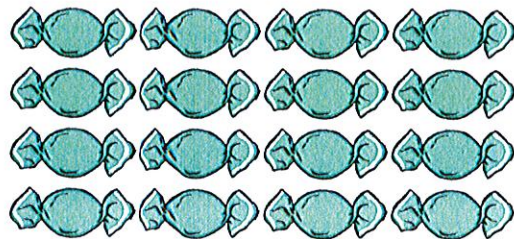
Total: 4 bananas
 $\frac{3}{4}$ of 4 is 3



Total: ladybirds
 $\frac{3}{4}$ of is



Total: cats
 $\frac{3}{4}$ of is



Total: sweets
 $\frac{3}{4}$ of is



Total: oranges
 $\frac{3}{4}$ of is