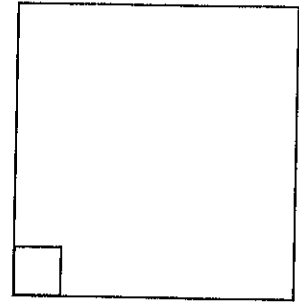


# Is It a Right Angle?

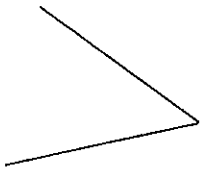
An angle is a measurement of a turn. They can be found where two lines meet.

A right angle is in the corner of a rectangle or square.

Look at the angles below. Decide whether each one is a right angle, bigger than a right angle or smaller than a right angle. Write down your answer on the line.

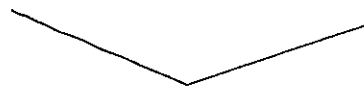


1.



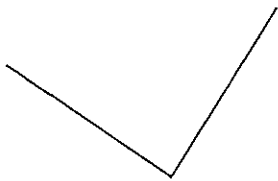
\_\_\_\_\_

2.




\_\_\_\_\_

3.



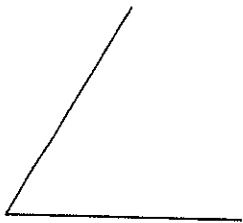
\_\_\_\_\_

4.



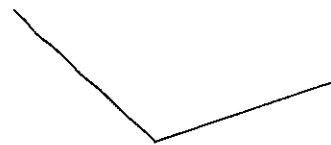
\_\_\_\_\_

5.



\_\_\_\_\_

6.



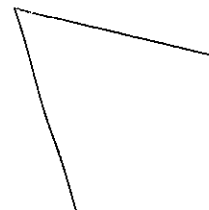
\_\_\_\_\_

7.



\_\_\_\_\_

8.



\_\_\_\_\_