

Name: _____ Class: _____ Date: _____

Worksheet 7

Comparing Numbers


1

Count the dots.

Write 1 less and 1 more.

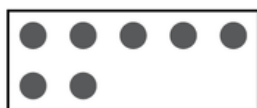
For example:

1 less




1 more

(a)




(b)



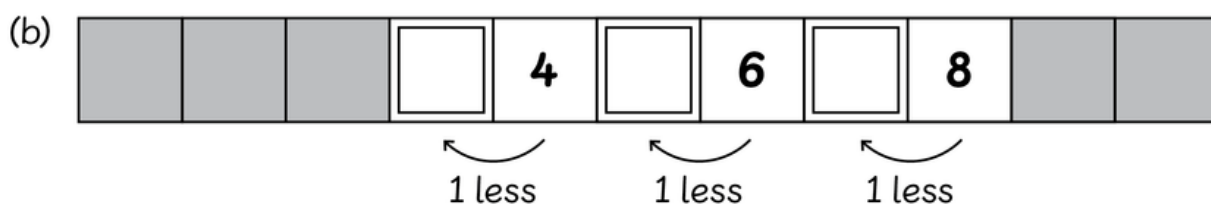
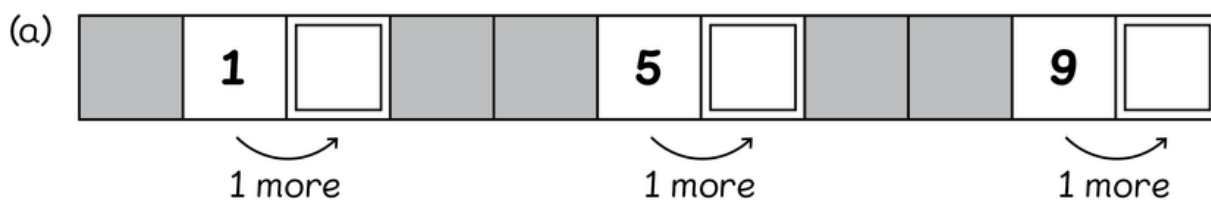
(c)



(d)



2 Write the missing numbers.



3 Write the missing numbers.

(a) 5 is 1 more than .

(b) is 1 more than 8.

(c) is 1 more than 0.

(d) 3 is 1 less than .

(e) is 1 less than 7.

(f) is 1 less than 1.