







Name: _____ Class: _____ Date: _____







Worksheet 5

Comparing Numbers of Objects

- 1** Count the objects in each set and write the number.
Circle the set with more objects.

| | | | | |
|-----|---|----------------------|--|----------------------|
| (a) |  | <input type="text"/> |  | <input type="text"/> |
| (b) |  | <input type="text"/> |  | <input type="text"/> |
| (c) |  | <input type="text"/> |  | <input type="text"/> |

- 2** Count the objects in each set and write the number.
Circle the set with fewer objects.

| | | | | |
|-----|---|----------------------|--|----------------------|
| (a) |  | <input type="text"/> |  | <input type="text"/> |
| (b) |  | <input type="text"/> |  | <input type="text"/> |
| (c) |  | <input type="text"/> |  | <input type="text"/> |

3

Circle the correct word to complete the sentences.

(a)



plate A



plate B

There are (more / fewer / equal to) cupcakes on plate A than on plate B.

(b)



vase A



vase B

There are (more / fewer / equal to) flowers in vase A than in vase B.

(c)



group A



group B

The number of leaves in group A is (more / fewer / equal to) the number of leaves in group B.