

I can practise my two times-table.

The 2 times-table



- 1 Write a fact from the 2 times-table to match each picture.

a)



$$\square \times \square = \square$$

b)



$$\square \times \square = \square$$

c)



$$\square \times \square = \square$$

- 4 Complete the number sentences.

a) $3 \times 2 = \square$

f) $\square = 12 \times 2$

b) $\square = 9 \times 2$

g) $2 \times \square = 2$

c) $2 \times 5 = \square$

h) $2 \times 0 = \square$

d) $2 \times \square = 4$

i) $14 = 2 \times \square$

e) $12 = \square \times 2$

j) $\square \times 2 = 22$

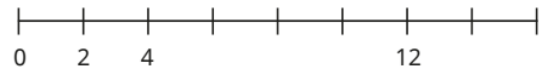
- 5 Tom has £8

Ann has twice as much money as Tom.

How much money does Ann have?

Ann has £

- 2 a) Complete the number line.



- b) Which times-table does the number line show?

Tick your answer.


 1 times-table

 2 times-table


 3 times-table

How do you know?

- 3 Complete the array and the times-table fact so that they match.



$2 \times 2 = \square$



$2 \times 5 = \square$





$2 \times \square = 8$

- 6 Sam is writing 10×2 in different ways.



I can write
 10×2 as $3 \times 2 + 7 \times 2$



Find three more ways that you can write
 10×2

Use counters to help you.

$$\square \times \square + \square \times \square$$

$$\square \times \square + \square \times \square$$

$$\square \times \square + \square \times \square$$

Compare answers with a partner.

Set: Friday 24th April 2026
Due: Wednesday 29th April 2026

Year 2 English homework:
Archbishop of York Young Leaders Award

As part of our Young Leaders Award, we are taking part in a 'Random Acts of Kindness' Challenge. Below, there is a grid of challenges; 6 at school and 6 at home.













If you would like to, you could take a few photos of your acts of kindness and send them into school. I can't wait to see/hear all the wonderful kind things you have done!

Random Acts of Kindness Grid



How many random acts of kindness can you do this week at school or at home?

Colour in the square when you have completed a challenge!

Let someone go before you in line 	Push someone's chair in 	Choose some books or toys to donate to a charity shop 	Collect food tins for your local Foodbank 
Hold the door open for someone 	Play with someone new at break 	Tidy your bedroom without being asked 	Set the table for your family 
Give someone a nice compliment 	INVENT YOUR OWN CHALLENGE 	Help with the washing up 	Play with a younger sibling or friend 

I hope this is a lovely first homework to kick off the summer term.

Thanks,

Mr Coates