

Year 2 English Homework

Today, we have looked at using 'and' and 'because' as conjunctions.
Can you use 'because' to link the two phrases to create a sentence?

For example:

The house is empty. The people have moved out.

The house is empty **because** the people have moved out.



1. I will eat cake later. It is my birthday.



2. Frogs are good at jumping. They have strong legs.



3. I feel happy I am going to see my friends today.




4. The dog was barking. It wanted to go outside.



5. Ben feels sick. He ate too many sweets.

Challenge: Create a sentence (or more) of your own about the picture below which uses **because** to give a reason.



Please make sure you keep reading regularly and play TT Rockstars too!

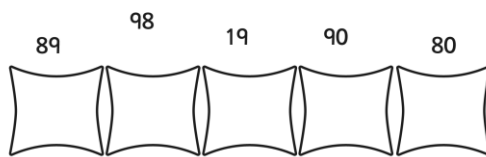

Have a fab weekend, thanks, Mr Coates

Year 2 Maths Homework

Continuing our work on place value, please have a go at as many of the questions below as you can. Please ask for help if you get stuck! Thanks, enjoy the weekend, Mr Coates

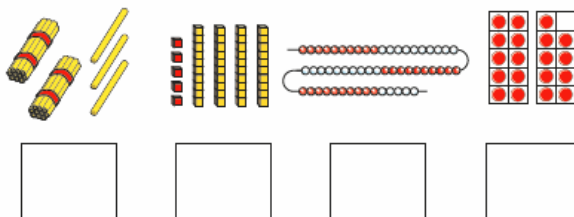
1

Fill in the spaces below with numbers in order from smallest to largest:



3

a) What numbers are shown?



b) Which is the smallest number?

is the smallest number.

c) Which is the greatest number?

is the greatest number.



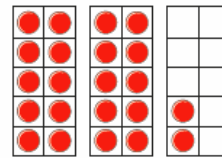
d) How did you find the smallest and greatest numbers?

e) Write any of the numbers to complete the number sentences.

>
 <

2

a) What numbers are shown?

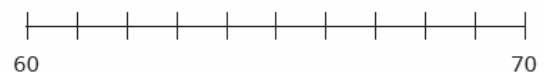


b) Write the numbers in order.

Start with the smallest number.

4

a) Label 68, 61 and 64 on the number line.



b) Write the numbers 68, 61 and 64 in order.

Start with the greatest number.

Write the numbers in order.

Start with the smallest number.

31

42

29

36

9

How did you order the numbers?

Is the statement always true, sometimes true or never true?

When you compare two numbers, the number with more ones is greater.

How do you know?